




WEATHERING, EROSION AND DEPOSITION

WEATHERING	EROSION	DEPOSITION
Break	Move	Stop-Build
		

1. Match



WEATHERING

EROSION

DEPOSITION

2. **Directions:** Read the statements and **classified** each process as weathering, erosion and deposition. Write the letter that is associated with it into the box that corresponds.

WEATHERING	EROSION	DEPOSITION

- A. Water getting into cracks, freezing, and breaking the rocks.
- B. Wind blowing sand from one place to another.
- C. Muddy water being transported by a fast-moving river
- D. Flood waters moving soil from one location to another.
- E. Glaciers dropping rock and sand to other places.
- F. Waves dropping sand to the beach.
- G. Rainwater carrying away water from a hill.
- H. Sand dunes forming at the desert.
- I. Raindrops on some rocks making them wear down.